

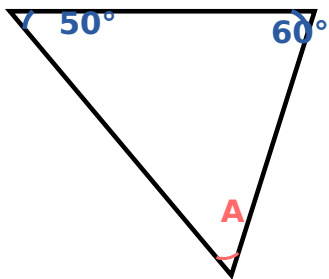
ANGLES IN TRIANGLES

Answer all of these questions. Remember to show your working out in all questions.

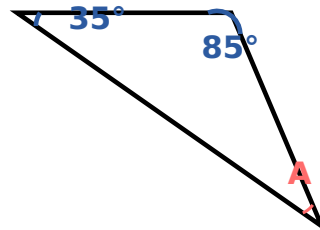
MAIN QUESTIONS



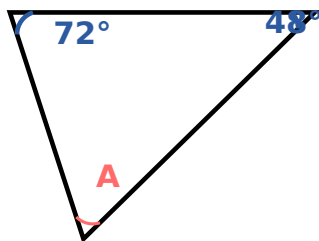
1. Find the missing angle in this diagram.



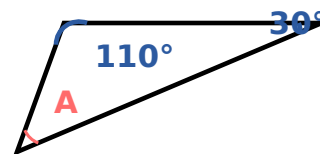
2. Find the missing angle in this diagram.



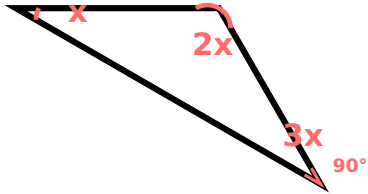
3. Find the missing angle in this diagram.



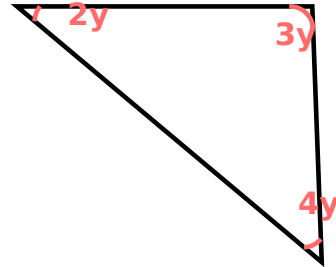
4. Find the missing angle in this diagram.



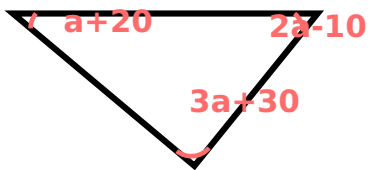
5. Find the missing angle in this diagram.



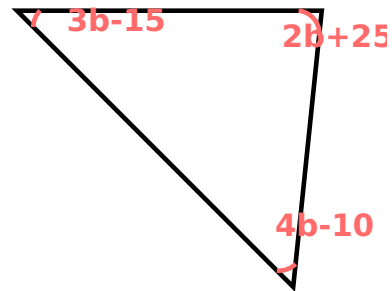
6. Find the missing angle in this diagram.



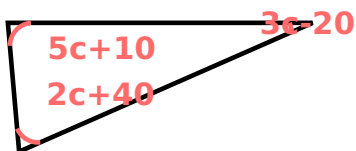
7. Find the missing angle in this diagram.



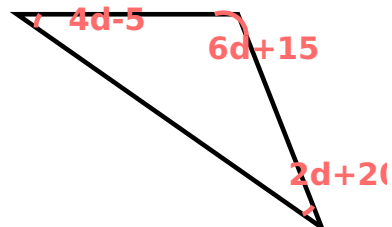
8. Find the missing angle in this diagram.



9. Find the missing angle in this diagram.



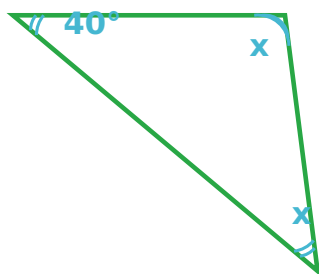
10. Find the missing angle in this diagram.



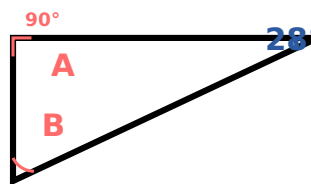
MASTER QUESTIONS



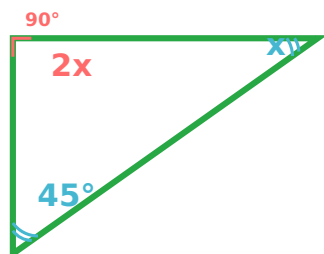
M1. Find the missing angle in this diagram.



M2. Find the missing angle in this diagram.



M3. Find the missing angle in this diagram.



M4. Find the missing angle in this diagram.

